



Name: _____

Read and write numbers to 1000 using base-ten numerals, number names, and expanded form.


PLACE VALUE EXPANDED NOTATION

Directions: Write the number in expanded notation.

1.



2.




3.



4.



5.




6.



7.



8.



____ I double checked my work.

Graphics/fonts copyright DJ Inkers. www.djinkers.com