
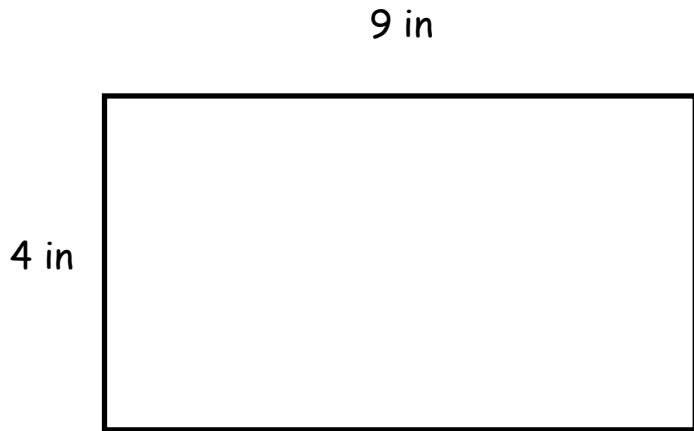




Name: \_\_\_\_\_

# Area

 Directions: Find the area in correct units. Show your work.

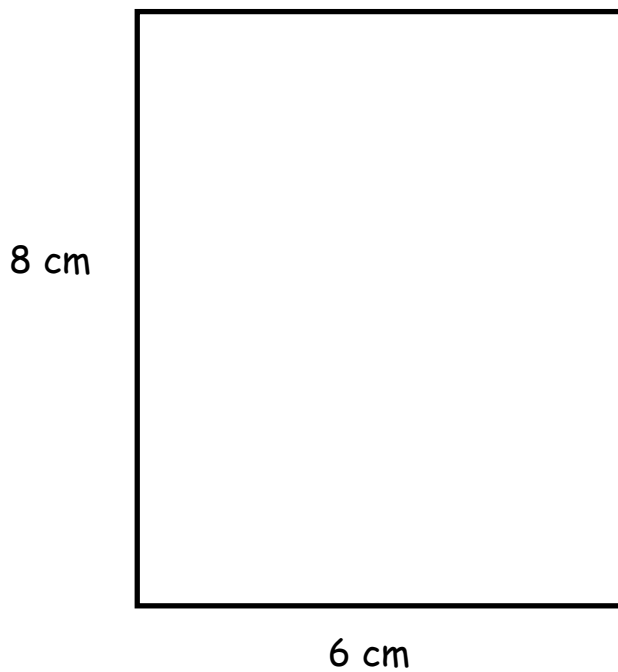


WORKSPACE

Write the equation:

\_\_\_\_\_ X \_\_\_\_\_ = \_\_\_\_\_

area = \_\_\_\_\_




WORKSPACE

Write the equation:

\_\_\_\_\_ X \_\_\_\_\_ = \_\_\_\_\_


area = \_\_\_\_\_

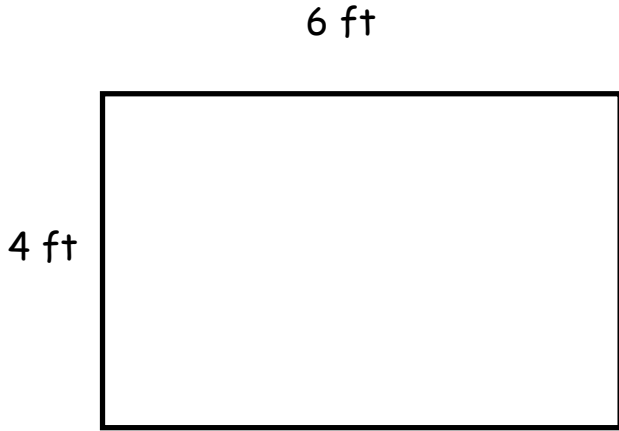




Name: \_\_\_\_\_

# Area and Perimeter

 Directions: Find the area in correct units. Show your work.

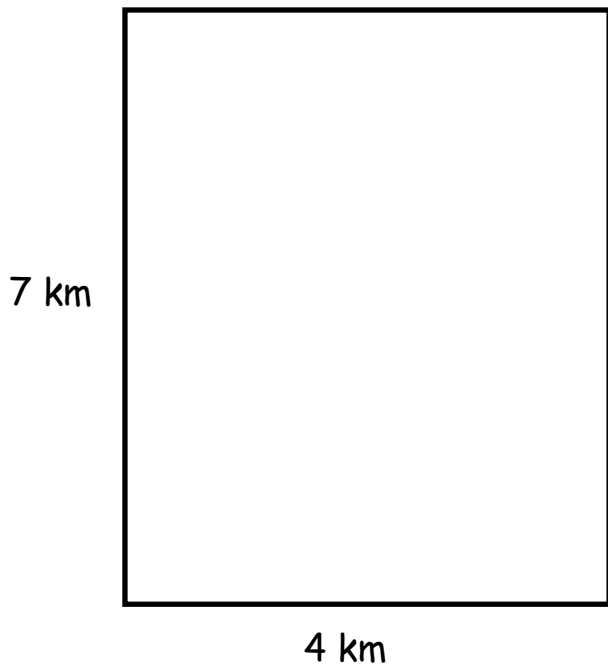


WORKSPACE

Write the equation:

\_\_\_\_\_ X \_\_\_\_\_ = \_\_\_\_\_

area = \_\_\_\_\_



WORKSPACE

Write the equation:

\_\_\_\_\_ X \_\_\_\_\_ = \_\_\_\_\_

area = \_\_\_\_\_

