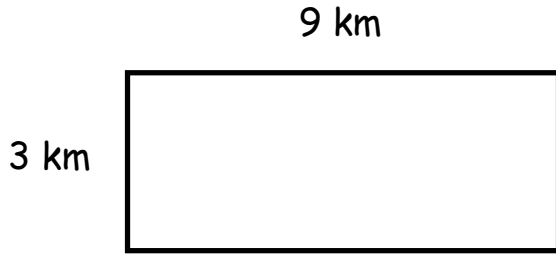




Name: _____

Area and Perimeter

Directions: Find the area and perimeter with correct units. Show your work.



WORKSPACE Write the equations:

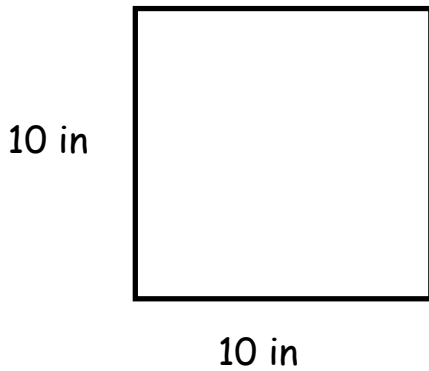
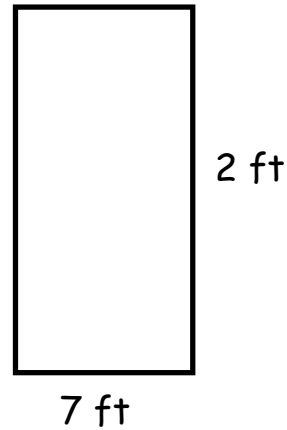
area = _____

perimeter = _____

WORKSPACE Write the equations:

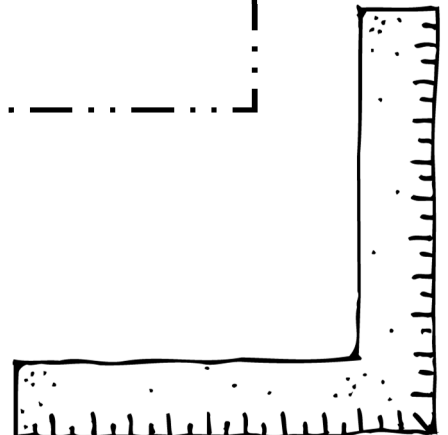
area = _____

perimeter = _____



WORKSPACE Write the equations:

area = _____



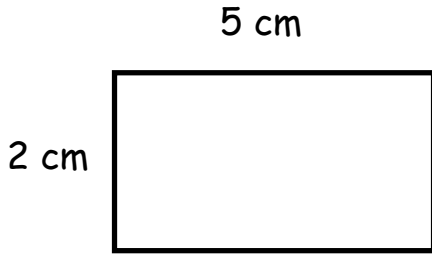
Extension: Trace the perimeter of the rectangles with a pen, marker, or crayon. Shade in the area with a highlighter or crayon.



Name: _____

Area and Perimeter

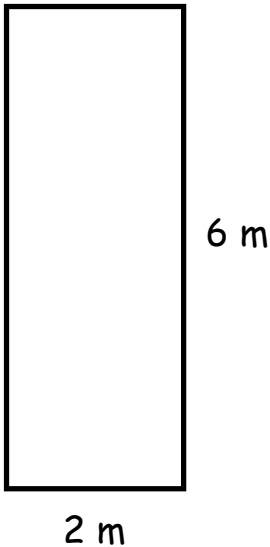
Directions: Find the area and perimeter with correct units. Show your work.



WORKSPACE Write the equations:

area = _____

perimeter = _____



WORKSPACE Write the equations:

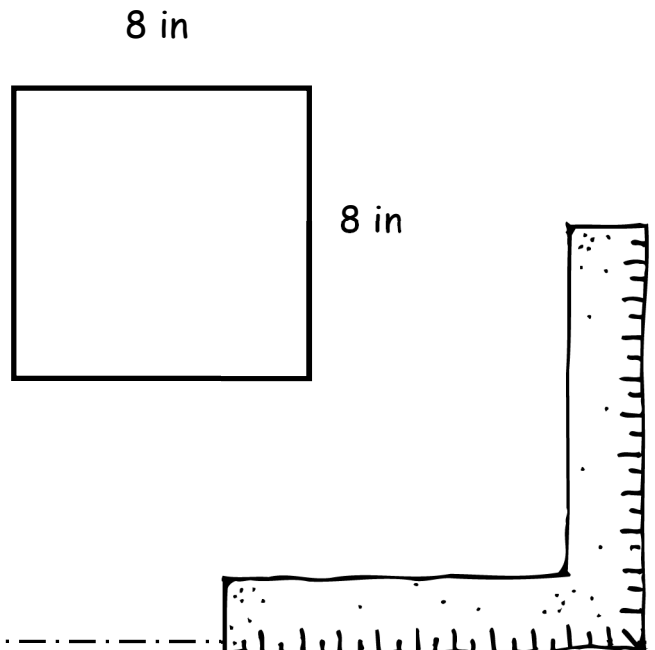
area = _____

perimeter = _____

WORKSPACE Write the equations:

area = _____

perimeter = _____



Extension: Trace the perimeter of the rectangles with a pen, marker, or crayon. Shade in the area with a highlighter or crayon.