
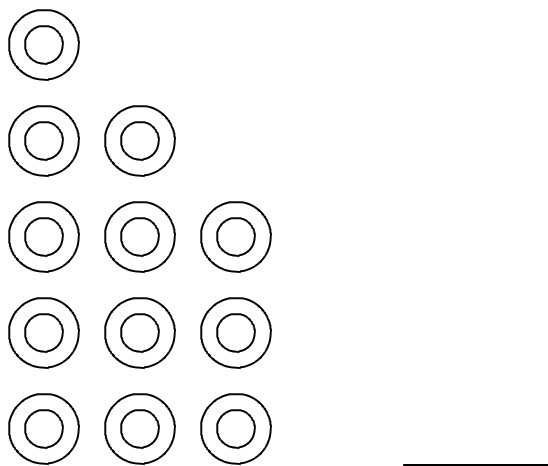
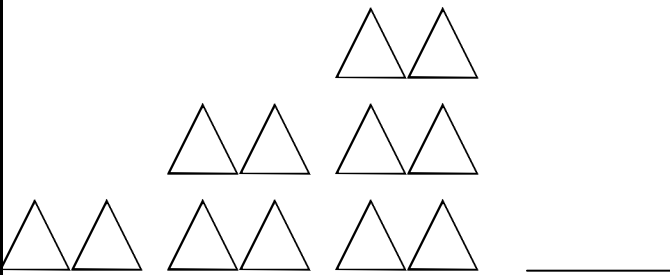
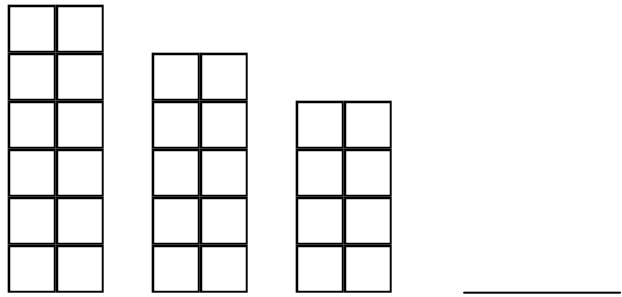


Name: \_\_\_\_\_

# Patterns

→ Draw a picture to show what comes next in each pattern.

 <p>_____</p>	 <p>_____</p>
 <p>_____</p>	 <p>_____</p>

→ Write the numbers that come next in the pattern.

5, 10, 15, 20, 25, \_\_\_\_\_, \_\_\_\_\_, \_\_\_\_\_, \_\_\_\_\_

10, 20, 30, 40, 50, 60, \_\_\_\_\_, 80, \_\_\_\_\_, \_\_\_\_\_

80, 70, 60, \_\_\_\_\_, \_\_\_\_\_, \_\_\_\_\_, 20, 10, 0