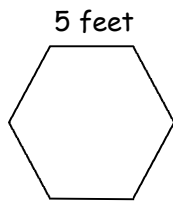


Name: \_\_\_\_\_

**Week 5 Day 1**

$$\begin{array}{r} 65 \\ +75 \\ \hline \end{array} \quad \begin{array}{r} 684 \\ +254 \\ \hline \end{array} \quad \begin{array}{r} 4568 \\ +8492 \\ \hline \end{array}$$

Maya made pen for her dog with equal sides as shown below. Which expressions can be used to find the perimeter.



- $6 + 6 + 6 + 6 + 6 + 6$
- $6 \times 5$
- $5 + 6$
- $5 \times 5 \times 5 \times 5 \times 5 \times 5$

Use  $<$ ,  $>$ , or  $=$  to compare the numbers.

$$6,004 \text{ \_\_\_\_ } 604$$

$$5,459 \text{ \_\_\_\_ } 5,495$$

$$3,500 \text{ \_\_\_\_ } 975$$

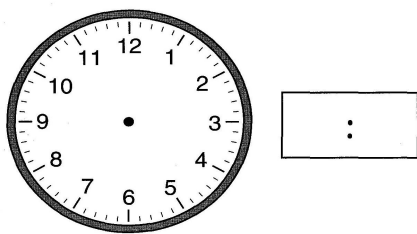
Solve.

$$8 \times 6 =$$


$$(5 \times 6) + (3 \times 6) =$$

$$\text{ \_\_\_\_ } + \text{ \_\_\_\_ } = \text{ \_\_\_\_ }$$

The movie started at 5:30 and lasted 2 hours and 20 minutes. Show the time the movie ended on both clocks.



The container below can hold 950 milliliters of liquid. If it already has 425 milliliters in it, how many more milliliters of liquid can be added?

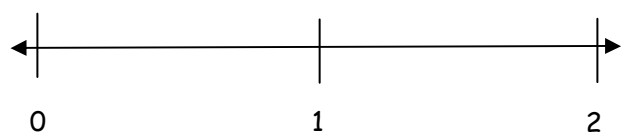


**Week 5 Day 2**

Skip county by 3, 4, 5, 6, and 7.

- 3, \_\_\_\_\_
- 4, \_\_\_\_\_
- 5, \_\_\_\_\_
- 6, \_\_\_\_\_
- 7, \_\_\_\_\_

Divide the number line in 4 equal parts.



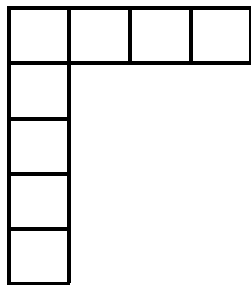
Create and label a tape diagram to solve.

$$6 \times 7 = n$$

Name: \_\_\_\_\_

## Week 5 Day 3


Marissa is putting new tiles in her kitchen floor. How many more tiles does she need? How many tiles did she use in all.



Draw 2 lines of *symmetry* for the shape below.



Shade 6/10 of the collection of triangles.



Write the number in expanded form.

43,852

Complete the input-output box.

Rule  $\times 6$

Input	Output
	36
	42
	48

Leah baked 42 cookies. She placed the cookies equally into 6 bags. How many cookies are in each bag?

Create and label a tape diagram to illustrate and solve.

## Week 5 Day 4

Write a division sentence and a related multiplication sentence for the previous problem. Use the letter  $n$  as the number of cookies in each bag.

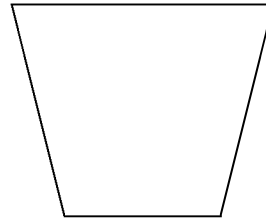
Draw a number line that is 8 centimeters in length. Draw a ray that is 6 centimeters in length. Draw a line segment that is 3 centimeters in length.

Name: \_\_\_\_\_

## Week 5 Day 5

Avery's piano lessons start at 6:30. The lessons last for 70 minutes. What time do the piano lessons end?

Draw as many lines of symmetry as you can for the shape below.



Allie made punch by mixing 230 mL of grape juice, 360 mL of pineapple juice, and 150 mL of cranberry juice. How much punch did she make?

Maya has a mass of 23 kilograms. Her father has a mass of 86 kilograms. What is the difference in their masses?

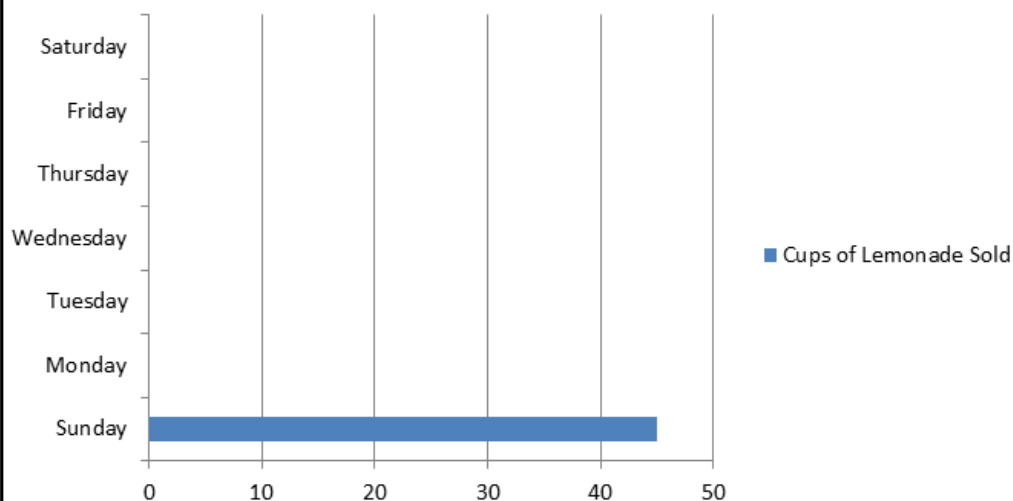
Solve.

$$5 \times 6 + 3 \times 6$$

Complete the bar graph to match the table of lemonade sales.

## Week 5 Day PT

### Cups of Lemonade Sold



Sunday	45 cups
Monday	15 cups
Tuesday	25 cups
Wednesday	25 cups
Thursday	30 cups
Friday	35 cups
Saturday	75 cups