

Name: _____

Week 2 Day 1


Solve. Circle the sum. Draw a box around the difference.

$$\begin{array}{r} 4536 \\ + 6556 \\ \hline \end{array}$$

$$\begin{array}{r} 454 \\ - 272 \\ \hline \end{array}$$

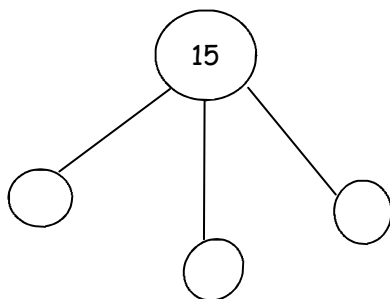
Draw an array for 3×5 . What is the product? _____

Divide the rectangle below into 4 rows with 4 equal sized squares in each row.

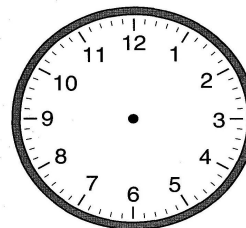



of units _____

Finish the number bond to show the problem. $3 \times 5 = 15$



Show 4:40 on each clock.



Bella has 6 packs of gum. There are 5 pieces of gum in each pack. How many pieces of gum does Bella have?

Draw an array and write a multiplication sentence.

Week 2 Day 2

Skip county by 2 and 3.

2, _____

3, _____

Circle the product. Draw a box around the factors.

$$4 \times 6 = 24$$

Partition (divide) the rectangle into 8 equal parts. Shade 3 parts. Write the fraction that is shaded using the fraction bar below.



Name: _____

Week 2 Day 3

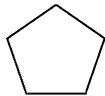
Solve. Circle the sum. Draw a box around the difference.

$$\begin{array}{r} 6940 \\ + 469 \\ \hline \end{array}$$

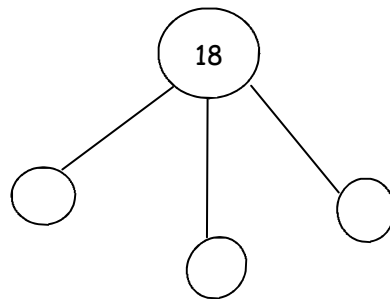
$$\begin{array}{r} 864 \\ - 645 \\ \hline \end{array}$$

Draw an array for 5×4 . What is the product? _____

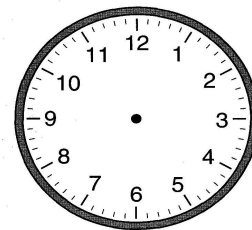

Finish the pattern on the line below.



Finish the number bond to show the problem. $3 \times 6 = 18$



Show 7:50 on each clock.



Jada has 3 packs of gum. There are 4 pieces of gum in each pack. How many pieces of gum does Jada have?

She chews 3 pieces. How many pieces does she have left?

Week 2 Day 4

Skip county by 4 and 5.

4, _____

5, _____

Circle the product. Draw a box around the factors.

$$4 \times 6 = 24$$

Compare the equations using $>$, $<$, and $=$.

$$3 \times 4 \quad \underline{\quad} \quad 4 \times 3$$

$$2 \times 6 \quad \underline{\quad} \quad 3 \times 5$$

$$4 \times 5 \quad \underline{\quad} \quad 5 + 5 + 5 + 6$$

$$1 \times 10 \quad \underline{\quad} \quad 2 \times 4$$

$$0 \times 15 \quad \underline{\quad} \quad 3 \times 4$$

Name: _____

Week 2 Day 5

Solve.

$$564 + 643$$

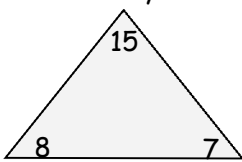
$$864 - 647$$

Complete the input-output box.

Rule $\times 3$

Input	Output
2	6
3	
4	

Complete the fact family triangle. Write the fact family.

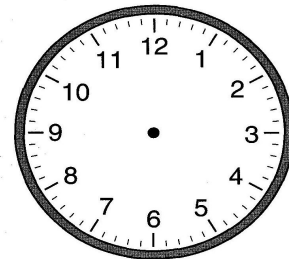


$$\begin{array}{l} _ + _ = _ \\ _ + _ = _ \\ _ - _ = _ \\ _ - _ = _ \end{array}$$

Round each number to the nearest ten and solve.

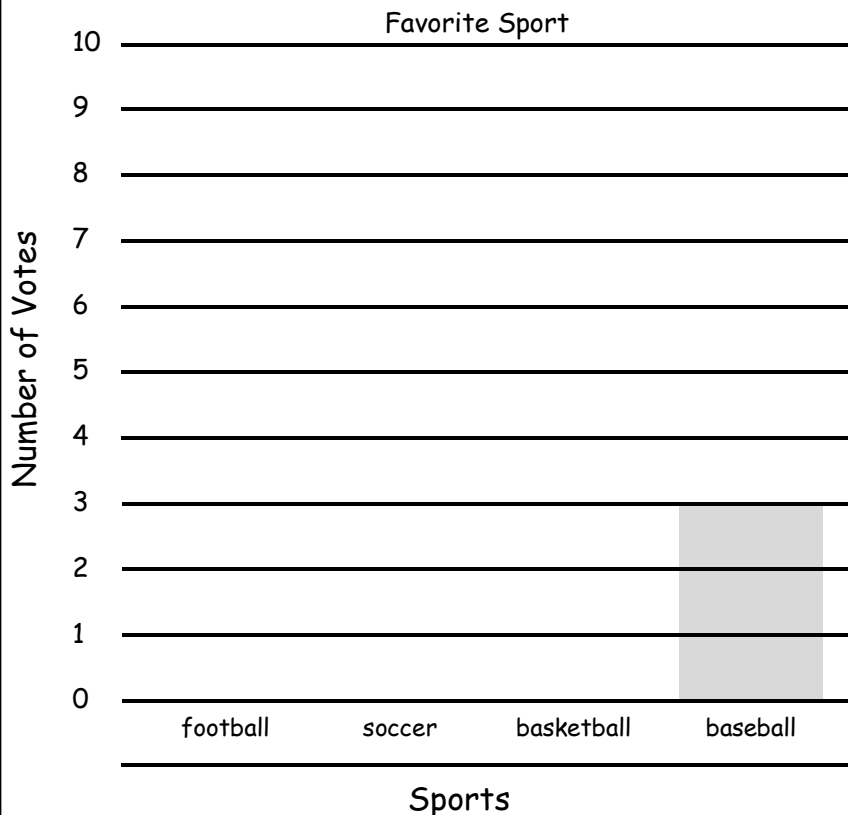
$$\begin{array}{r} 78 \\ + 33 \\ \hline \end{array} \rightarrow$$

Show 3:55 on both clocks.



_____ : _____

Week 2 PT



Use the table below to complete the bar graph to the side. Create a question to ask using information from the graph.

football	7
soccer	9
basketball	5
baseball	3

_____ ?