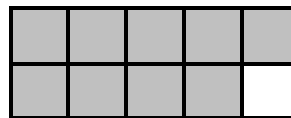


Name: _____

Week 1 Day 1


49	25
43	73
50	23
<u>+ 24</u>	<u>+ 9</u>

Count the shaded squares by 2s to determine if the number is even or odd. even / odd




Explain how you know it is even or odd.

Divide the rectangle below into 4 rows with 3 equal sized squares in each row.

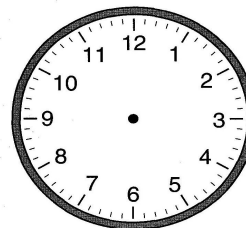



of units _____

Use repeated addition to show the number of objects in the array by rows..



Show 8:30 on each clock.



Jack has 936 baseball cards. What is the value of the 9 in the number above? _____

He sold 345 baseball cards to a friend. How many baseball cards does he have left over?

Week 1 Day 2

Layke is counting by 5. Finish the rest for her.

165, 170, 175, 180, 185, 190, 195, _____

_____ / _____ / _____ / _____ / _____ / _____

Circle the expressions that are true.

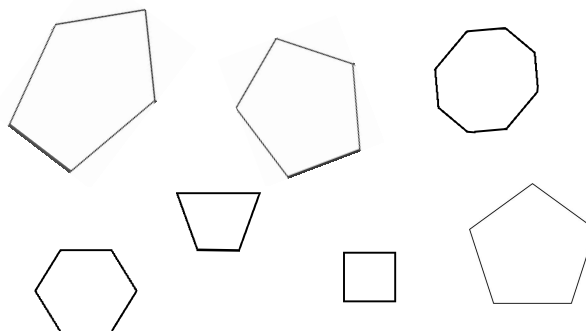
546 > 849

658 > 654

435 < 834

345 = 543

Circle the pentagons (5 sides) below.



Name: _____

Week 1 Day 3

Complete the number sentence.

$$49 - a = 43$$

$$a = \underline{\quad}$$


$$400 + b + 3 = 453$$

$$b = \underline{\quad}$$

How much money? _____



Shade in boxes to match the repeated addition below.



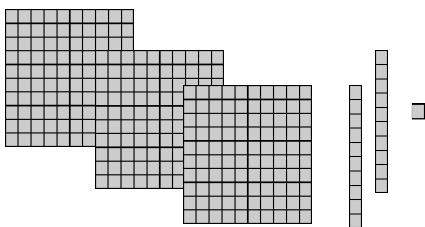
$$6 + 6 + 6 = 18$$

Write the number in standard form.

$$6000 + 90 + 4$$

Draw a shape with 5 angles.

What number is show below? _____



Finish the pattern.

170, 180, 190, _____, _____, _____,

Circle the 1st number you wrote. Write a doubles fact to equal the number you circled.

$$\underline{\quad} + \underline{\quad} = \underline{\quad}$$

Week 1 Day 4

Alli has these coins in her purse. How much money does she have? _____

How much money will Alli have left if she buys candy for 34 cents? _____



Name: _____

Week 1 Day 5

Complete the problem.

$$\begin{array}{r} 45 \\ 36 \\ 28 \\ + 56 \\ \hline \end{array}$$

Solve. Write the answers in

order from least to greatest.

$30 + 6 =$

$5 \times 7 =$

$47 - 10 =$

$338 - 300 =$

_____ , _____ , _____ , _____

Write the value of the underlined digit.

$4\underline{3}84$ _____

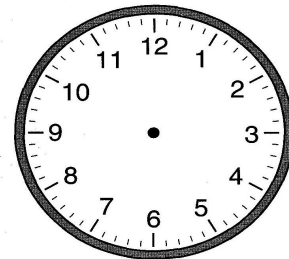
$900\underline{6}$ _____

$\underline{6}826$ _____

Write the number in standard form.

$7000 + 300 + 8$

Show 10:15 on both clocks.



_____ : _____

Week 1 PT

Circle the correct data set (A, B, or C) for the line plot below.

A) 1, 2, 2, 3, 4, 4, 5, 6, 6, 6, 9

B) 1, 3, 3, 4, 5, 6, 6, 8,

C) 1, 2, 2, 4, 6, 6, 6, 9, 9

