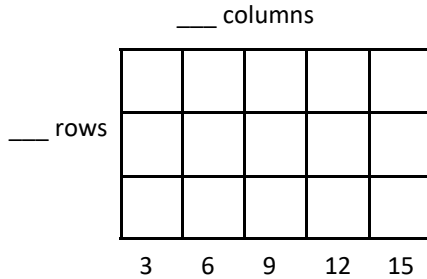




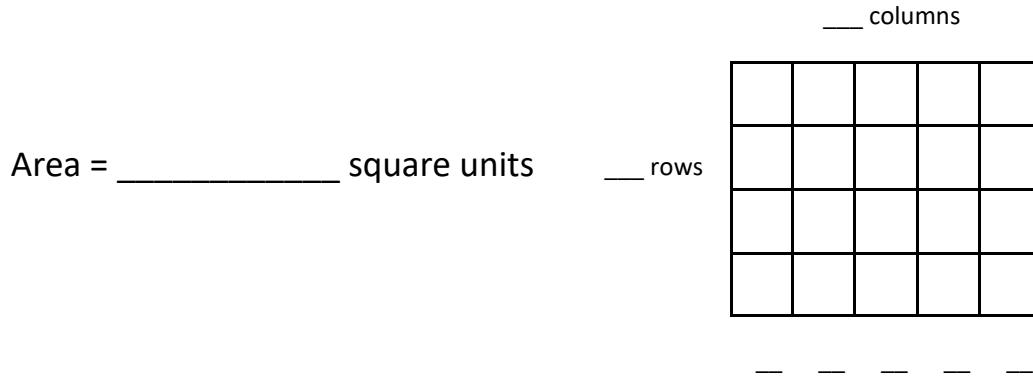
Name: _____

Area

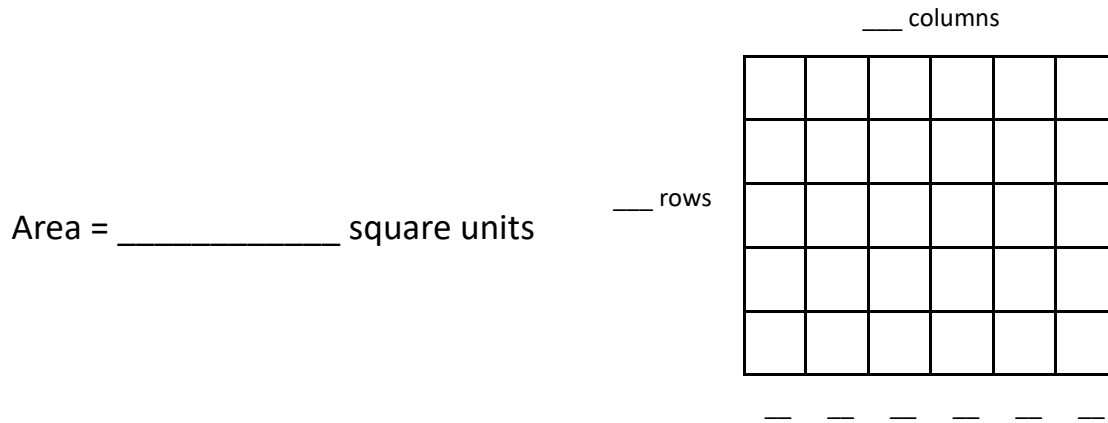
Directions: Fill in the number of rows and columns. Skip count to find the area of the rectangles.



Area = _____ square units



Area = _____ square units




Area = _____ square units





Name: _____

Area

 Directions: Fill in the number of rows and columns. Skip count to find the area of the rectangles.

___ columns

| | | | | |
|--|--|--|--|--|
| | | | | |
| | | | | |
| | | | | |

5
10
15

___ rows

Area = _____ square units

___ columns

| | | | | | |
|--|--|--|--|--|--|
| | | | | | |
| | | | | | |
| | | | | | |
| | | | | | |

—
—
—
—

Area = _____ square units

___ columns

| | | | |
|--|--|--|--|
| | | | |
| | | | |
| | | | |
| | | | |
| | | | |

—
—
—
—
—

Area = _____ square units

___ rows

