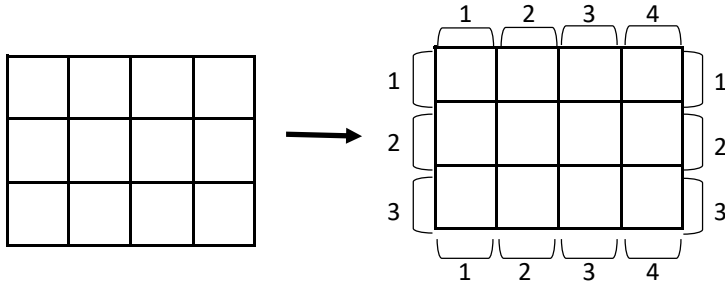




Name: _____


Perimeter

Directions: Trace the outside lines of the rectangles. Count and label the outside of each outer unit square. Add the numbers together to find the perimeter.



$$\text{perimeter} = 3 + 4 + 3 + 4$$

$$\text{perimeter} = 14 \text{ units}$$





$$\text{perimeter} = \underline{\quad} + \underline{\quad} + \underline{\quad} + \underline{\quad}$$

$$\text{perimeter} = \underline{\hspace{2cm}} \text{ units}$$

$$\text{perimeter} = \underline{\quad} + \underline{\quad} + \underline{\quad} + \underline{\quad}$$


$$\text{perimeter} = \underline{\hspace{2cm}} \text{ units}$$

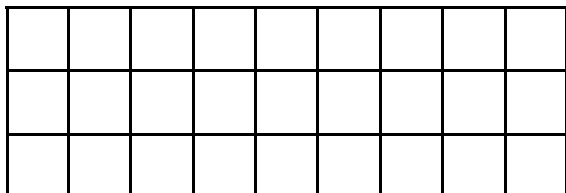




Name: _____

Perimeter

 Directions: Trace the outside lines of the rectangles. Count and label the outside of each outer unit square. Add the numbers together to find the perimeter.

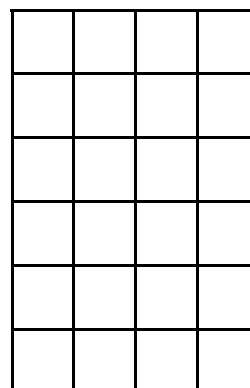


perimeter = ___ + ___ + ___ + ___

perimeter = _____ units

perimeter = ___ + ___ + ___ + ___

perimeter = _____ units



perimeter = ___ + ___ + ___ + ___

perimeter = _____ units

