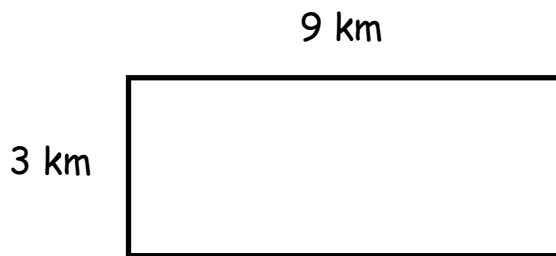




Name: _____

Area

 Directions: Find the area in the correct units. Show your work.

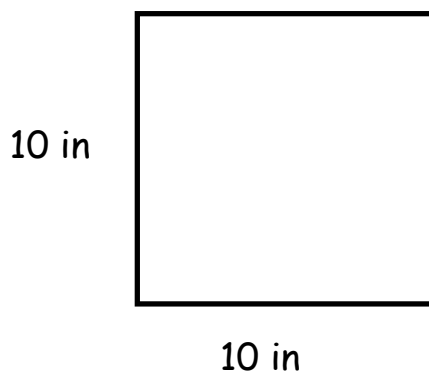
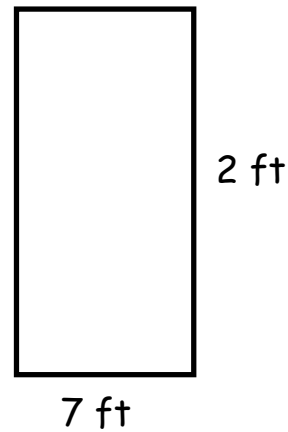


WORKSPACE Write the equation:

area = _____

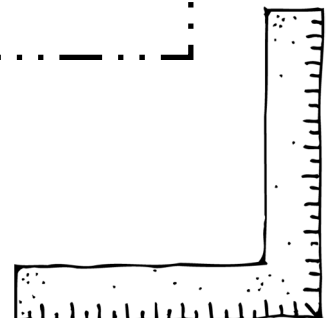
WORKSPACE Write the equation:

area = _____



WORKSPACE Write the equation:


area = _____

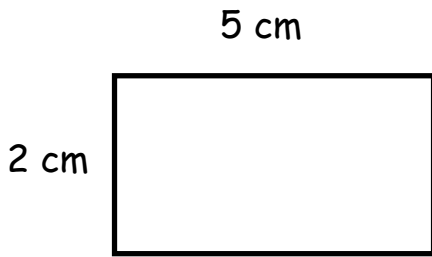




Name: _____

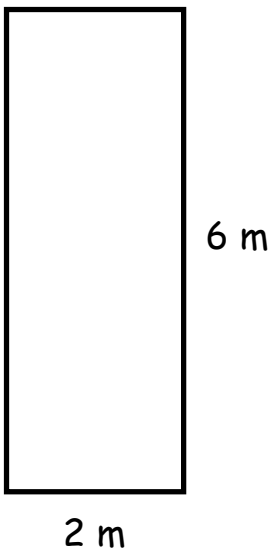
Area

 Directions: Find the area in correct units. Show your work.



WORKSPACE Write the equation:

area = _____



WORKSPACE Write the equation:

area = _____

WORKSPACE Write the equation:

area = _____

